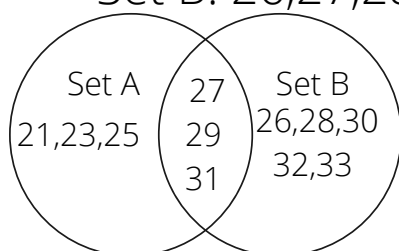


Venn Diagram

1) You have two sets of numbers. Set A include all numbers between 20 and 32 and set B includes all the whole numbers from 25 to 33. If you draw a Venn diagram, what numbers will be in the intersection? The set of numbers they have in common.

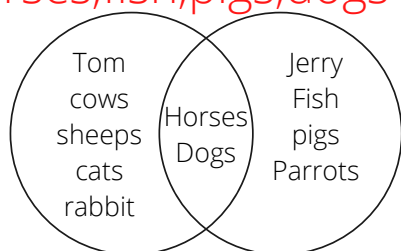
Set A: 21,23,25,27,29,31

Set B: 26,27,28,29,30,31,32,33

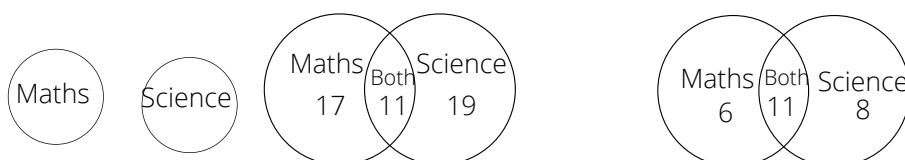


Answer: 27,29,31

2) Tom and Jerry both live on farms. Tom has dogs, cows, horses, sheeps, cats and a pet rabbit. Jerry has horses, fish, pigs, dogs and parrots.



3) A class was asked which subject they liked, Maths or Science. 17 of the students liked Maths, 19 liked Science. 11 of them liked both Maths and Science. 4 of the students do not like either of them. How many students are in the class.



Answer: $6 + 8 + 11 + 4 = 29$ Students

Total 29 students are in the class.