

Improper Fractions / Mixed Numbers

Write each problem as an improper fraction and a mixed number

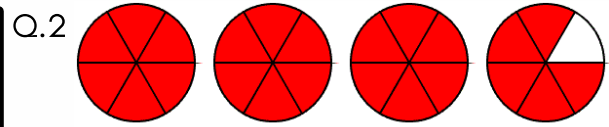


Improper Fraction

$$\frac{9}{4}$$

Mixed Number

$$2\frac{1}{4}$$

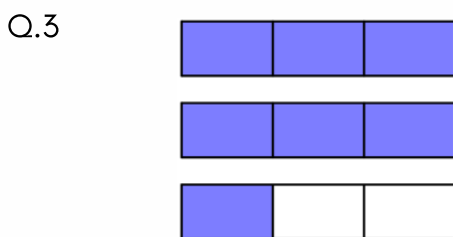


Improper Fraction

$$\frac{13}{4}$$

Mixed Number

$$3\frac{3}{4}$$




Improper Fraction

$$\frac{7}{3}$$

Mixed Number

$$2\frac{1}{3}$$



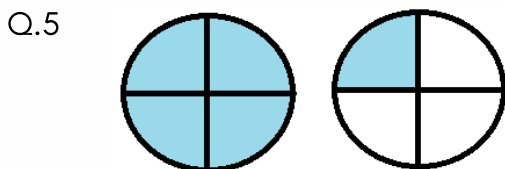
Improper Fraction

$$\frac{13}{4}$$

Mixed Number

$$3\frac{3}{4}$$

Shade in the fraction and fill in the empty box.

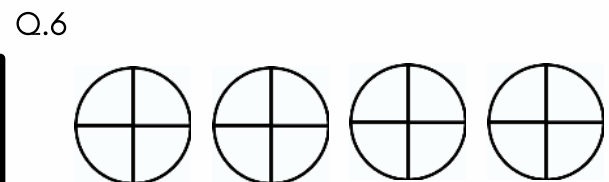


Improper Fraction

$$\frac{5}{4}$$

Mixed Number

$$1\frac{1}{4}$$

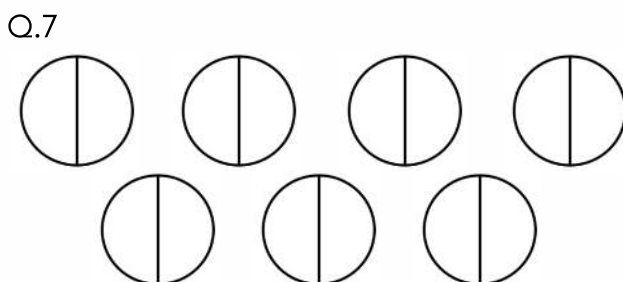


Improper Fraction

$$\frac{5}{4}$$

Mixed Number

$$1\frac{1}{4}$$




Improper Fraction

$$\frac{13}{2}$$

Mixed Number

$$6\frac{1}{2}$$



Improper Fraction

$$\frac{13}{2}$$

Mixed Number

$$6\frac{1}{2}$$