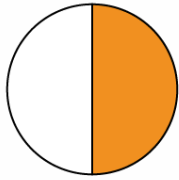


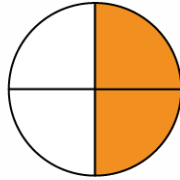
Equivalent Fractions

Write the fraction for each shaded object.

Q.1

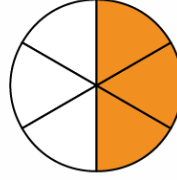


$\frac{1}{2}$

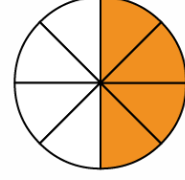


—

Q.2



$\frac{3}{6}$

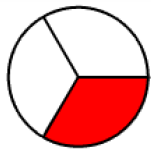


—

Q.3



—



—

Q.4



$\frac{2}{4}$




—

Shade in and write equivalent fractions

Q.5



$\frac{1}{3}$

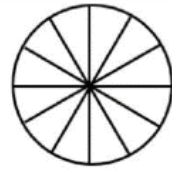


—

Q.6



$\frac{2}{3}$



—

Q.7



$\frac{3}{5}$

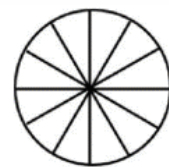


—

Q.8



$\frac{1}{6}$



—